


Name _____

Date _____

Clarinet Fingerings I

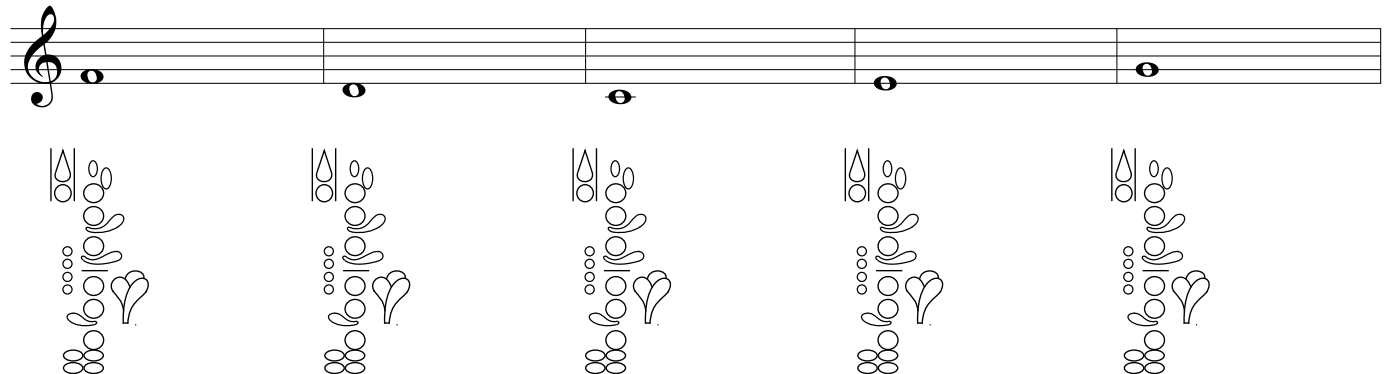
Fill in the fingering and write the note name for each note. Play each note on your instrument.

1. _____ 2. _____ 3. _____ 4. _____ 5. _____



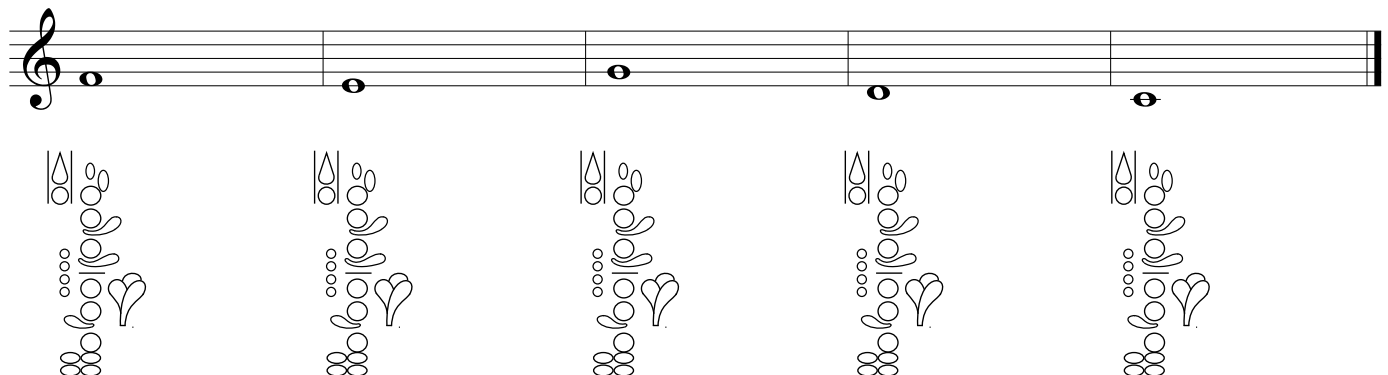
The first row of the worksheet contains five musical staves, each with a single note. The notes are C4, C4, D4, E4, and F4. Below each note is a diagram of the clarinet keys and fingerings. The diagrams are identical for all five notes, showing the left hand on the upper register keys and the right hand on the lower register keys.

6. _____ 7. _____ 8. _____ 9. _____ 10. _____



The second row of the worksheet contains five musical staves, each with a single note. The notes are G4, A4, B4, C5, and D5. Below each note is a diagram of the clarinet keys and fingerings. The diagrams are identical for all five notes, showing the left hand on the upper register keys and the right hand on the lower register keys.

11. _____ 12. _____ 13. _____ 14. _____ 15. _____



The third row of the worksheet contains five musical staves, each with a single note. The notes are E5, F5, G5, A5, and B5. Below each note is a diagram of the clarinet keys and fingerings. The diagrams are identical for all five notes, showing the left hand on the upper register keys and the right hand on the lower register keys.